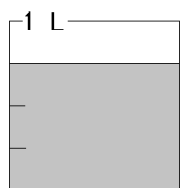
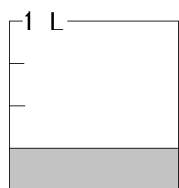


教材6-(3) 解答 分数の意味と表し方・計算

分数の計算



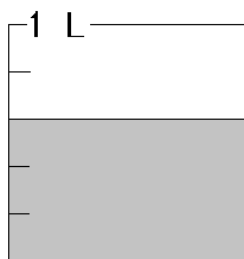
は,



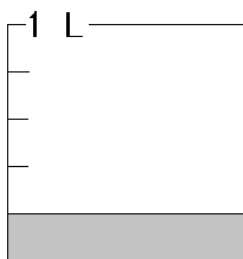
が3つあると考えることができます。

(1) 次の計算をしましょう。

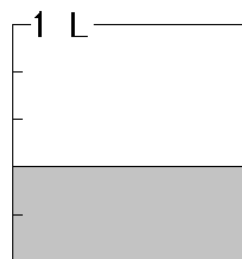
① $\frac{3}{5} - \frac{1}{5} =$



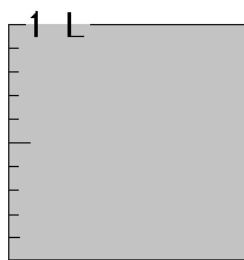
−



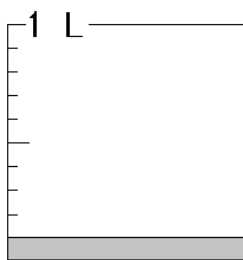
=



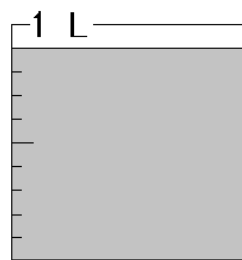
② $1 - \frac{1}{10} =$



−



=



(2) 次の計算をしましょう。

① $\frac{4}{8} - \frac{2}{8} =$

② $\frac{5}{7} - \frac{2}{7} =$

③ $1 - \frac{3}{4} =$

④ $1 - \frac{7}{9} =$